

Social and Economic Challenges

Learning Objective:

- **Assess** challenges that face Newcastle




Learning Outcomes:

- **Describe** what urban deprivation is
- **Explain** why parts of a city are deprived
- **Assess** inequalities in different parts of a city



What is social deprivation?



SOCIAL DEPRIVATION

- Where a person's **quality of life** falls below a level that is regarded as the **acceptable minimum** by the government.
- They would lack the things that are essential such as work, money, housing and services.

Central Business District (CBD)



Outer Suburbs



Zones of a town – most deprived and why?



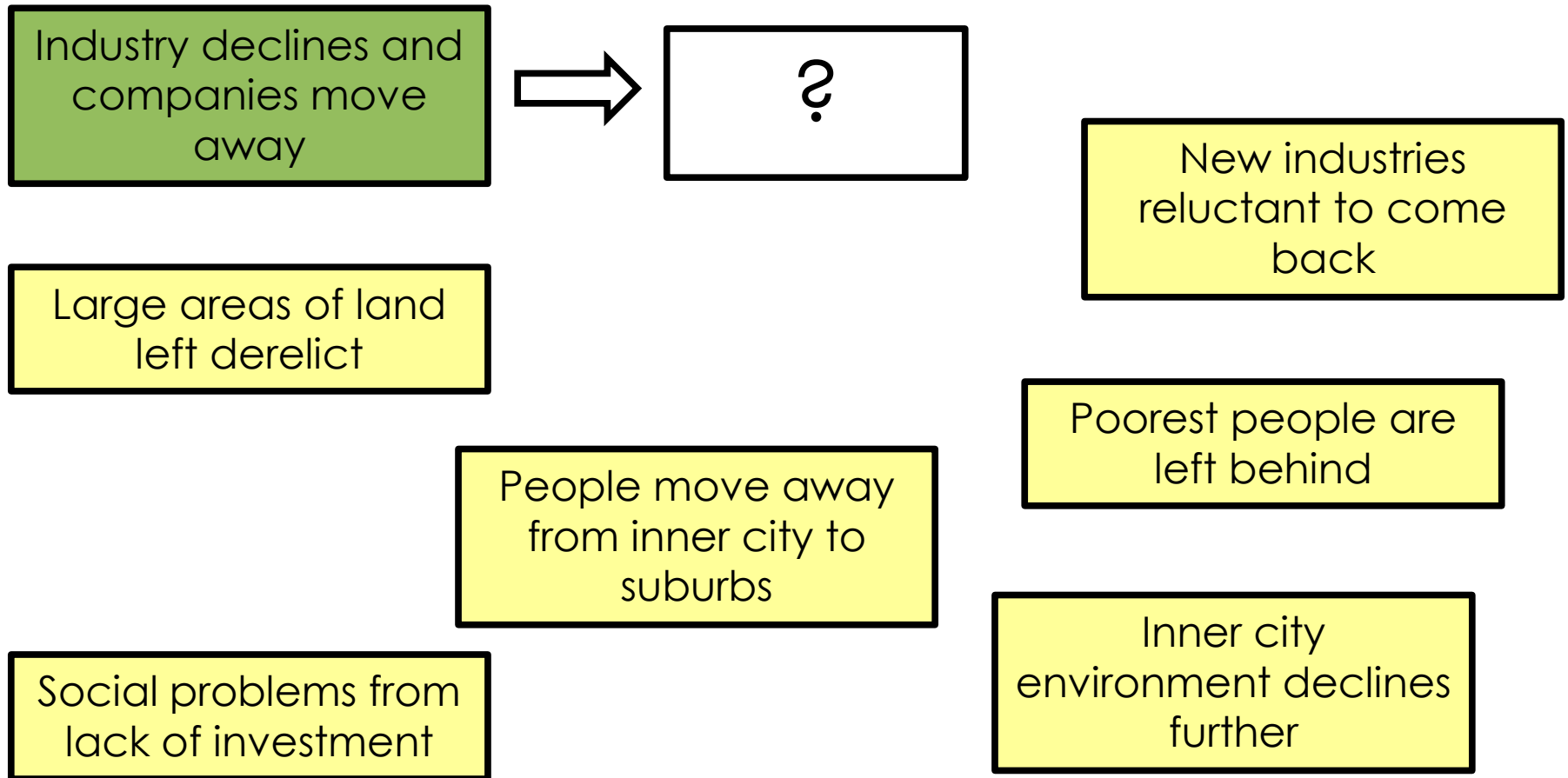
Inner Suburbs

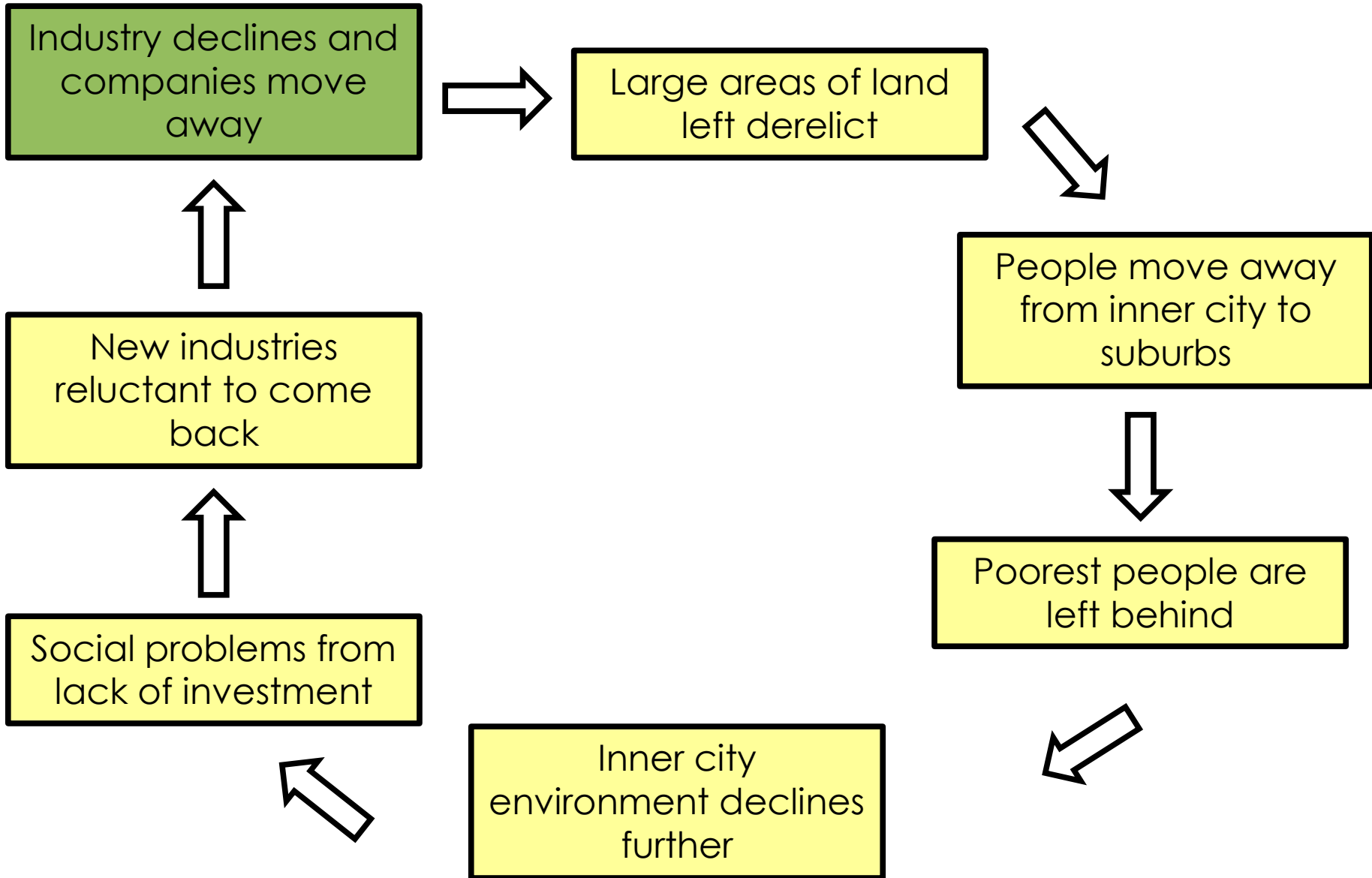


Inner City

Why are inner city areas deprived?

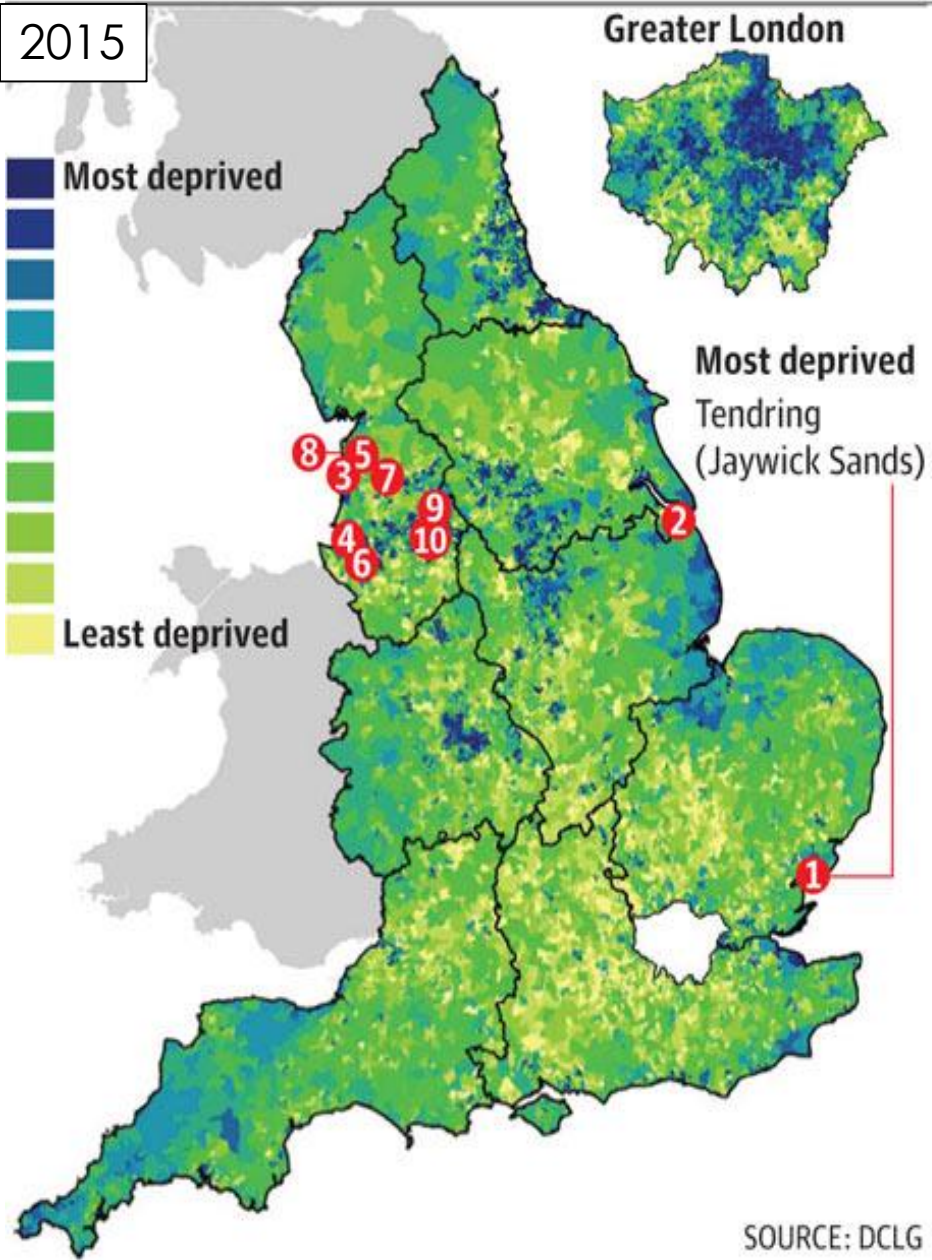
This is linked to the **cycle of deprivation**. Most UK cities were at one time, reliant on industry but have since declined





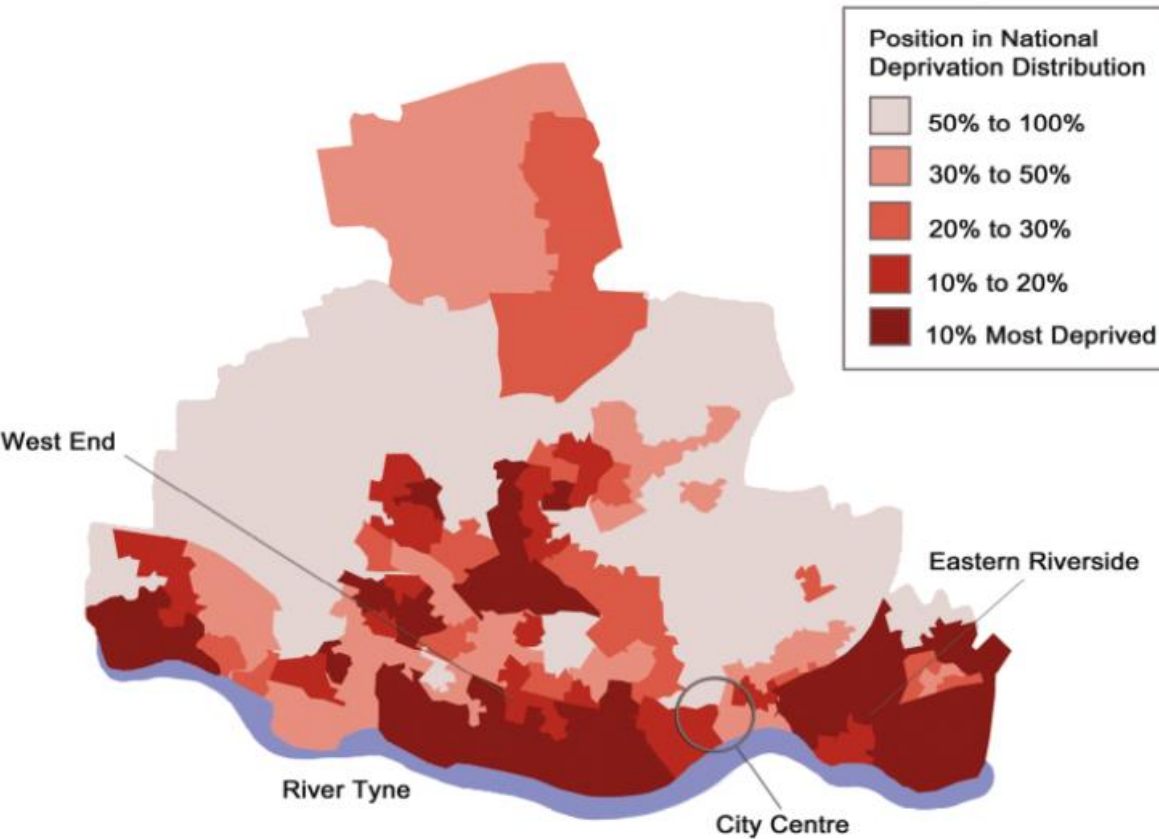
England's most deprived areas

2015



- 1 East of the Jaywick area of Clacton-on-Sea
Tendring District
- 2 West of the Grant Thorold area of Grimsby
North East Lincolnshire
- 3 West of the Revoe area
Blackpool
- 4 West of the Anfield area
Liverpool
- 5 East of Grange Park/West of Normoss area
Blackpool
- 6 Speke area
Liverpool
- 7 West of Burnley area
Lancashire
- 8 South of Queenstown
Blackpool
- 9 East of the Weir area
Rochdale
- 10 Collyhurst area
Manchester

SOURCE: DCLG



Study the deprivation map above

- Describe the **pattern** of social deprivation in Newcastle upon Tyne.
- In which parts are the **most** and **least** deprived wards?
- Any **reasons** for this pattern?



Comparing North Jesmond and Benwell

St. George's Terrace, Jesmond (High Street)



Adelaide Terrace, Benwell (High Street)



Lindisfarne Road, Jesmond



Ethel Street, Benwell



Measure of deprivation	North Jesmond	Benwell	Newcastle average	England
Unemployment	10%	13%	11%	7.6%
Hold degrees	32%	15%	30%	30%
No qualification	1.5%	31%	16.5%	15%
Claiming benefits	0.4%	5%	2.5%	1.8%
Life expectancy Male	81 years	75yrs	76yrs	79yrs
Life expectancy Female	85 years	81yrs	81yrs	83yrs

1. Annotate (around the images) the characteristics of the 2 areas.
2. Use the images & the census data above to describe the differences between North Jesmond and Benwell.
Can you suggest why there are differences?
3. Which is a more reliable source (data or photos) to compare the two wards and why?

Extension: Investigate inequalities in the city using CDRC maps
<http://maps.cdrc.ac.uk/#/geodemographics/oac11/default/BTTTT/12/-1.6229/54.9741/>